



Challenge 2 22.06.2021 Comparing numbers

The 2 girls use two of their cards each to make **two-digit numbers**.

Eva's number is **bigger than** Alex's number.


What could their numbers be?

How many answers can you find?

 Eva	 Alex
<div style="display: flex; justify-content: space-around;"> <div style="border: 1px solid black; padding: 2px 10px;">1</div> <div style="border: 1px solid black; padding: 2px 10px;">2</div> <div style="border: 1px solid black; padding: 2px 10px;">4</div> </div>	<div style="display: flex; justify-content: space-around;"> <div style="border: 1px solid black; padding: 2px 10px;">3</div> <div style="border: 1px solid black; padding: 2px 10px;">5</div> <div style="border: 1px solid black; padding: 2px 10px;">6</div> </div>

Challenge 1 22.06.2021 Comparing numbers

Write > < or =



Write > < or =



